




# Little Math Trees



Estimate how many objects there are in each tree. Then count the objects.

How close was your guess?

Which group has the most objects in it?



1. Yesterday four apples fell off a tree. Today five more apples fell off the tree. How many apples fell off altogether?

2. Naqiyyah picked seven apples in the morning. She picked four more apples in the afternoon. How many apples did she pick in all?

3. Ahmed had eight apples. He gave his sister Yasmin five apples. How many apples did Ahmed have left?

4. Layla had six apples. She divided the apples equally between her and Safiyah and Maryam. How many apples did each girl get?